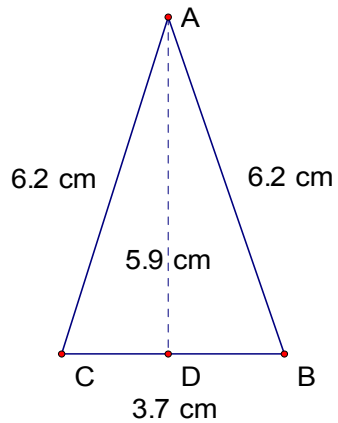
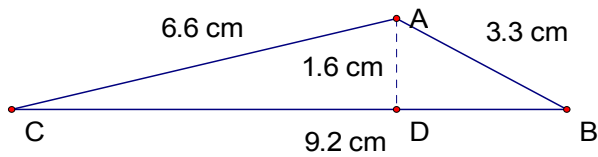
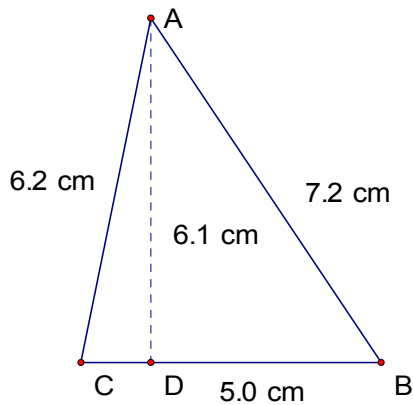
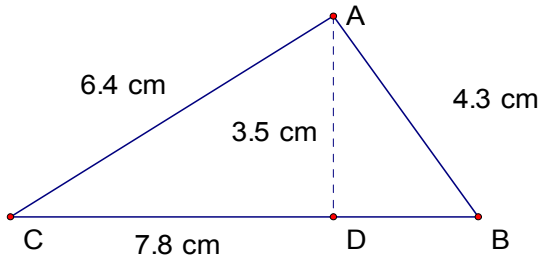


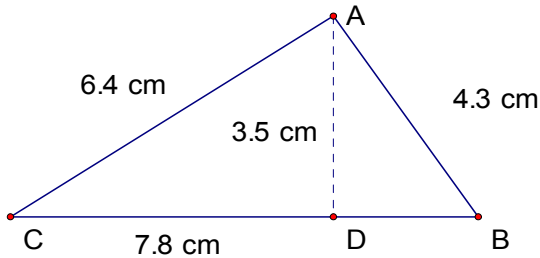
Perimeter and Area of Triangles (A)

Instructions: Calculate the perimeter and area for each triangle below.



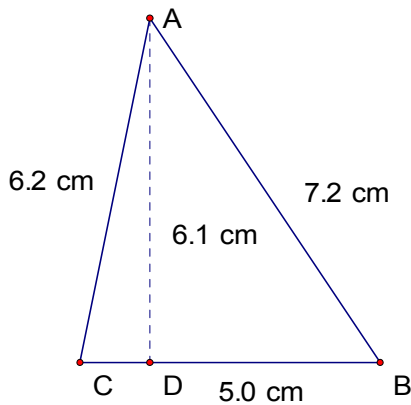
Perimeter and Area of Triangles (A) Answers

Instructions: Calculate the perimeter and area for each triangle below.



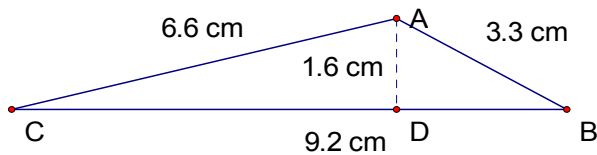
$$\text{Perimeter} = 18.5 \text{ cm}$$

$$\text{Area} = 13.65 \text{ cm}^2$$



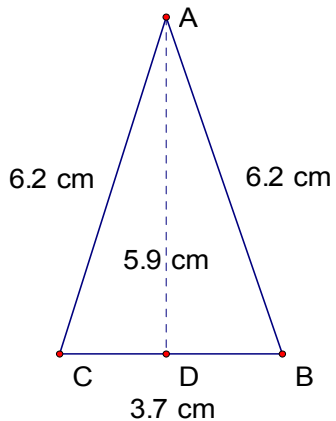
$$\text{Perimeter} = 18.4 \text{ cm}$$

$$\text{Area} = 15.25 \text{ cm}^2$$



$$\text{Perimeter} = 19.1 \text{ cm}$$

$$\text{Area} = 7.36 \text{ cm}^2$$



$$\text{Perimeter} = 16.1 \text{ cm}$$

$$\text{Area} = 10.915 \text{ cm}^2$$