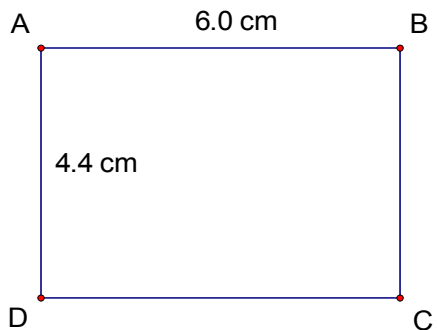
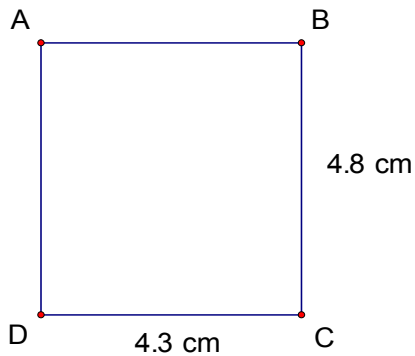
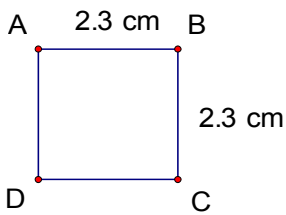
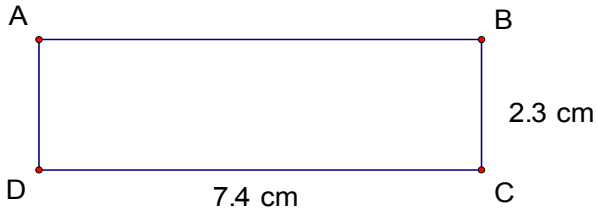


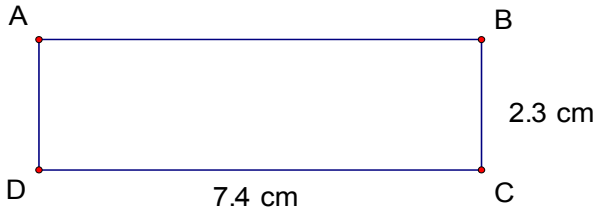
# Perimeter and Area of Rectangles (B)

Instructions: Calculate the perimeter and area for each rectangle below.



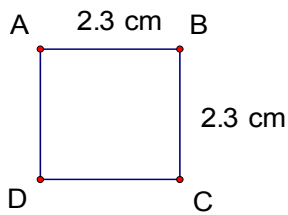
# Perimeter and Area of Rectangles (B) Answers

Instructions: Calculate the perimeter and area for each rectangle below.



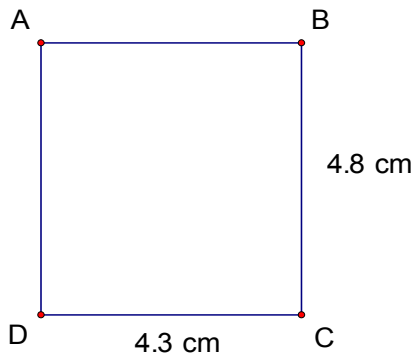
$$\text{Perimeter} = 19.4 \text{ cm}$$

$$\text{Area} = 17.02 \text{ cm}^2$$



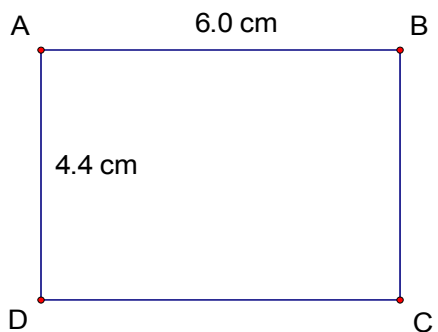
$$\text{Perimeter} = 9.2 \text{ cm}$$

$$\text{Area} = 5.29 \text{ cm}^2$$



$$\text{Perimeter} = 18.2 \text{ cm}$$

$$\text{Area} = 20.64 \text{ cm}^2$$



$$\text{Perimeter} = 20.8 \text{ cm}$$

$$\text{Area} = 26.4 \text{ cm}^2$$