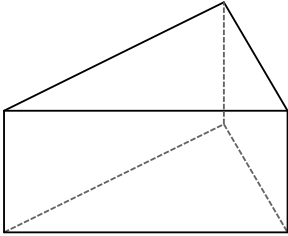
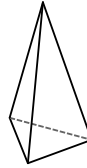


Identifying Three-Dimensional Figures (2)

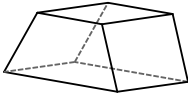
1)



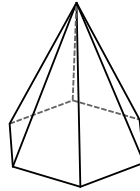
2)



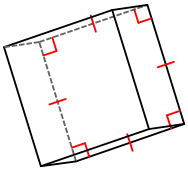
3)



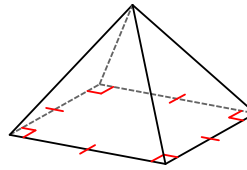
4)



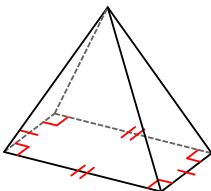
5)



6)



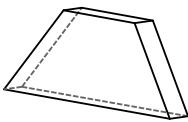
7)



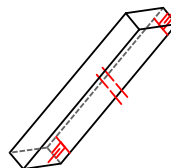
8)



9)

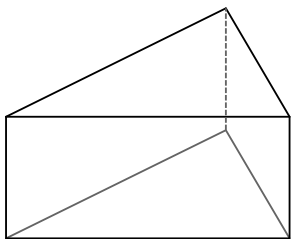


10)



Identifying Three-Dimensional Figures (2) Answers

1)



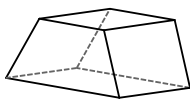
triangular prism

2)



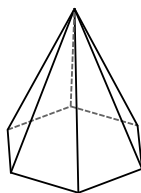
triangular pyramid

3)



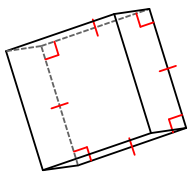
trapezoidal prism

4)



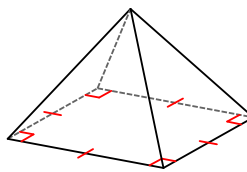
hexagonal pyramid

5)



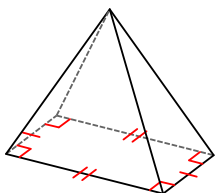
square prism

6)



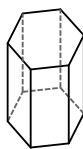
square pyramid

7)



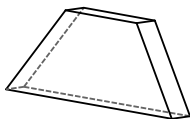
rectangular pyramid

8)



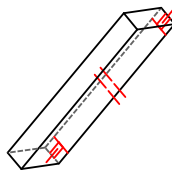
hexagonal prism

9)



trapezoidal prism

10)



rectangular prism