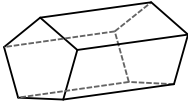
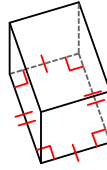


Identifying Three-Dimensional Figures (1)

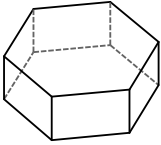
1)



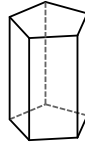
2)



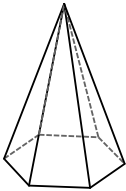
3)



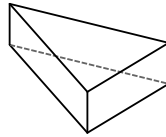
4)



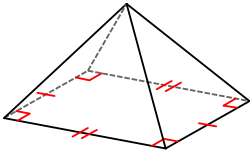
5)



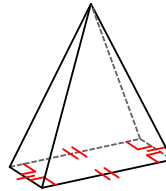
6)



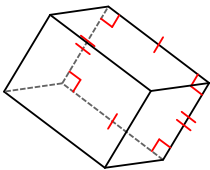
7)



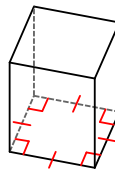
8)



9)

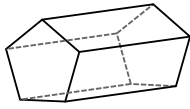


10)



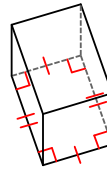
Identifying Three-Dimensional Figures (1) Answers

1)



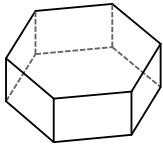
pentagonal prism

2)



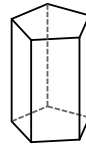
rectangular prism

3)



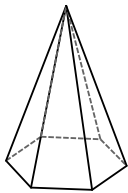
hexagonal prism

4)



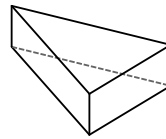
pentagonal prism

5)



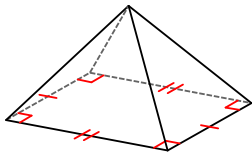
hexagonal pyramid

6)



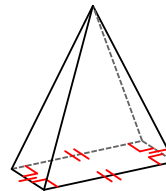
triangular prism

7)



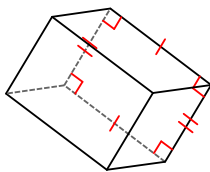
rectangular pyramid

8)



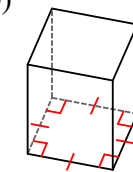
rectangular pyramid

9)



rectangular prism

10)



square prism